

Centre Number	Candidate Number	Name
---------------	------------------	------

UNIVERSITY OF CAMBRIDGE INTERNATIONAL EXAMINATIONS  
International General Certificate of Secondary Education

**GEOGRAPHY**

**0460/02**

Paper 2

October/November 2005

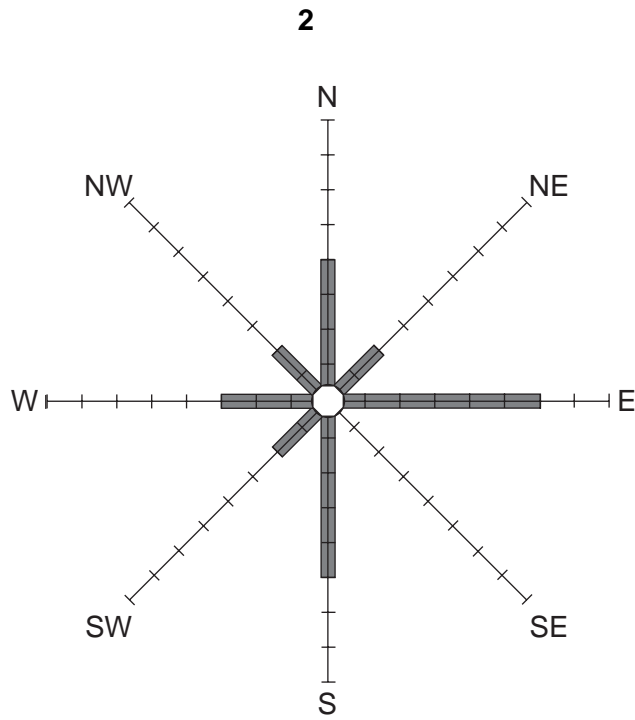
INSERT 1

**1 hour 30 minutes**

**READ THESE INSTRUCTIONS FIRST**

This insert contains Fig. 2 for Question 2, Fig. 3 and Table 1 for Question 3 and Fig. 6 for Question 5.

Write your Centre number, candidate number and name in the spaces provided and attach it to your answer paper/answer booklet.



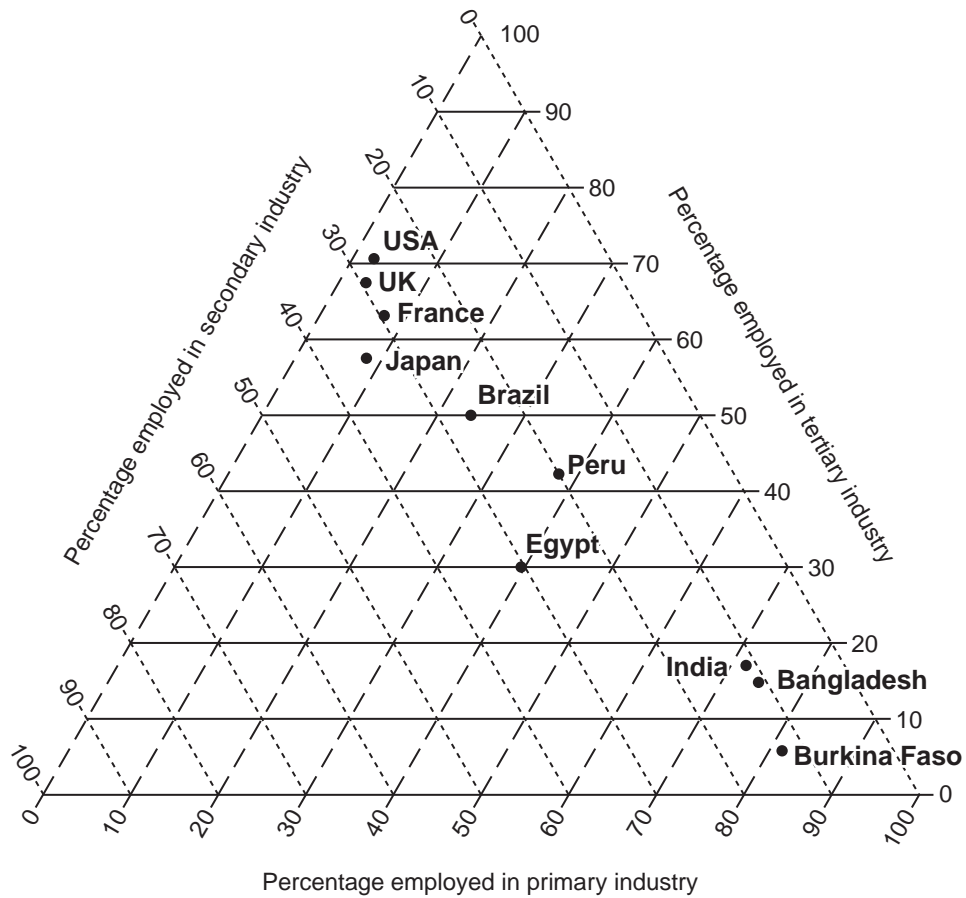
Name of diagram .....

Prevailing wind .....

Direction of wind	<b>N</b>	<b>NE</b>	<b>E</b>	<b>SE</b>	<b>S</b>	<b>SW</b>	<b>W</b>	<b>NW</b>	Calm
Number of days	4	2	6	4	5	2	3	2	3

**Fig. 2 for Question 2**

### Employment structure of selected countries



**Fig. 3 for Question 3**

Country	Percentage employment		
	Primary	Secondary	Tertiary
Egypt	40	30	30
	8	29	63
Bangladesh	74	11	15

**Table 1 for Question 3**

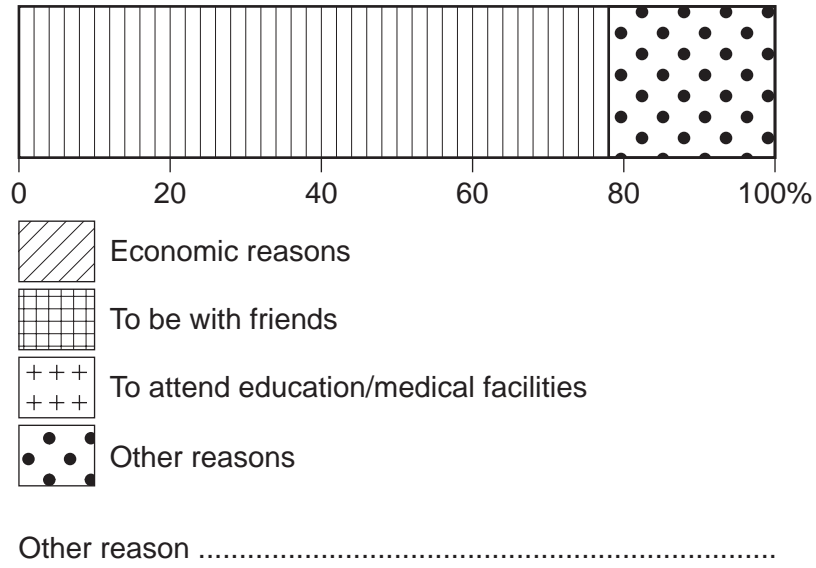


Fig. 6 for Question 5